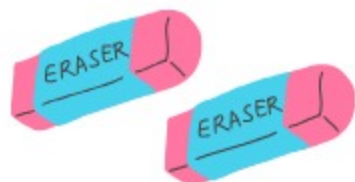
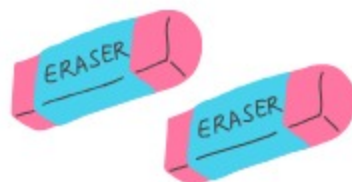


# Single-Digit Addition (up to 5)

Solve each addition problem and write your answer in the box.




+





=





+




=




+




=




+




=