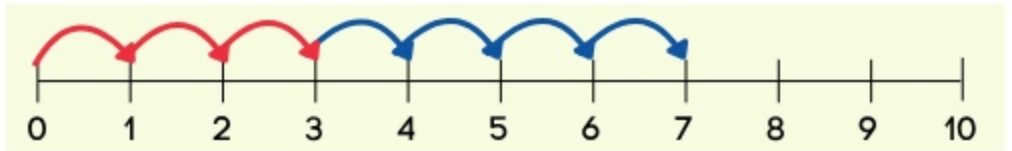


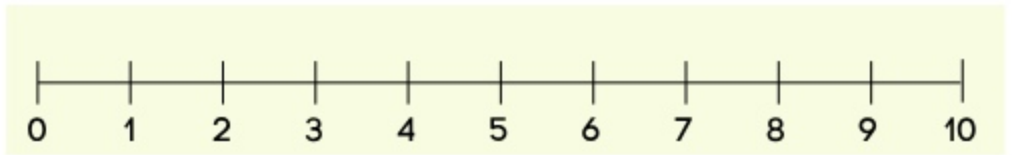
Adding With Number Lines

Start on the first number, hop the second number of steps, write the sum in the box.

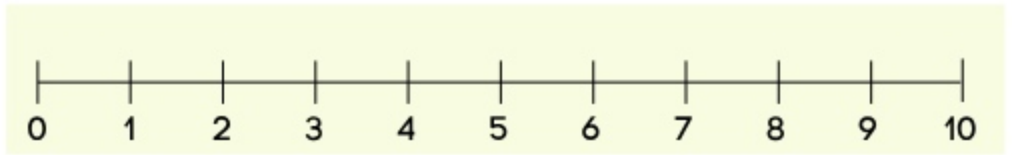
$$3 + 4 = \boxed{7}$$



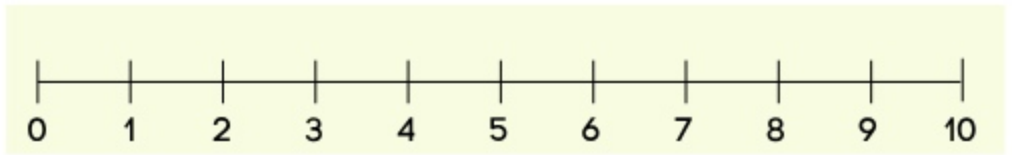
$$2 + 5 = \boxed{}$$



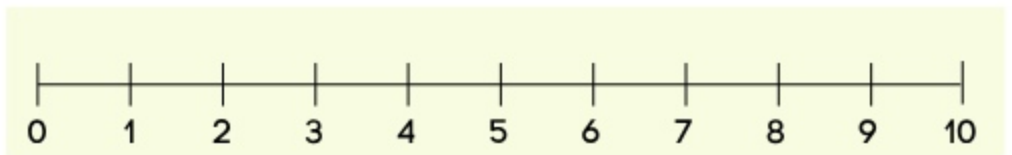
$$6 + 2 = \boxed{}$$



$$1 + 7 = \boxed{}$$



$$4 + 3 = \boxed{}$$



$$5 + 2 = \boxed{}$$

